

DOWNLOAD PDF DOCUMENT



RIGHT TRIANGLE TRIGONOM...

DOWNLOAD DOCUMENT NOW

Updated: 11/05/2017

DISCLAIMER:

BE-FIRST.CO uses the following right triangle trigonometry answers book available for free PDF download which is also related with

RIGHT TRIANGLE TRIGONOMETRY ANSWERS

There are cases when you need right triangle trigonometry answers instantly and have no site to download it from. We can provide you for an opportunity to get as many eBooks as you need and all for free. We offer an access to a rich collection of files in PDF format that are easy to download. You don't need to pay either for right triangle trigonometry answers or other books. This is a unique opportunity. We ask you to pass a registration by following the link and answering simple questions. Then you will get an access to right triangle trigonometry answers and can download this file and other data without paying for it. We ask you to pass the registration because of endless hackers' attacks that deface our website. When you register, you get a unique access to right triangle trigonometry answers and other files, so that bots cannot do harm. So, if you need right triangle trigonometry answers right now, you will get it after simple registration.

DOWNLOAD NOW

DOWNLOAD PDF DOCUMENT

DOWNLOAD PDF DOCUMENT

RIGHT TRIANGLE TRIGONOM...

[MICROSOFT WORD - MODULE 1- TRIANGLE TRIGONOMETRY.DOC](#)

Module 1 Triangle Trigonometry What this module is about This module will guide you to determine the kind of equation you will use to solve the missing parts of a right triangle. This will require the use of trigonometric functions. Here, you will also learn how to solve problems involving right triangles. What you are expected to learn This module is designed for you to: 1. determine the equation i...

File name: Module 1- Triangle Trigonometry.pdf
[Download now or Read Online](#)

[RIGHT TRIANGLE PRACTICE](#)

Problems Free PDF eBook Download: Right Triangle Practice Problems Download or Read Online eBook right triangle practice problems in PDF Format From The Best User Guide Database Do NOT Write on This Handout!!! Triangle Word Problems Practice. Triangle Angle Sum Thm: The sum of all three angles is 180. 1. In an acute triangle, the IB Math SL1: Trig Practice Problems. Alei - Desert Academy Page 1 of ...

File name: right-triangle-practice-problems.pdf
[Download now or Read Online](#)

[12_U2.5 WS 6 RIGHT TRIANGLE TRIG PRACTICE V1.13](#)

Honors Freshman Physics Name Right Triangle Trigonometry Practice Date 1 For the triangle to the right use right triangle trigonometry to a Calculate hb Determine the length of the side adjacent to the 15.7 angle c Calculate the length of the side adjacent to the 15.7 angle using the Pythagorean theorem and compare your answer to the value obtained in part b 2 If angle A 35.0 and side b is 15.67 m det...

File name:
[Download now or Read Online](#)

[WHAT S THE TRIG - AN INTRODUCTION TO RIGHT TRIANGLE TRIGONOMETRY](#)

Geometry Major Topics Right Triangle Trigonometry NCTM Principles and Standards Content Standards Geometry Analyze characteristics and properties of two- and three-dimensional geometric shapes and develop mathematical arguments about geometric relationships Analyze properties and determine attributes of two- and three-dimensional objects Explore relationships including congruence and similarity among cla...





















File name:
[Download now or Read Online](#)

DOWNLOAD PDF DOCUMENT

DOWNLOAD PDF DOCUMENT

Here below another book similar with:

RIGHT TRIANGLE TRIGONOM...

-  [right triangle trigonometry answers](#)
-  [special right triangle quiz answer](#)
-  [paul foerster algebra and trigonometry answers](#)
-  [blitzer advanced algebra trigonometry answers](#)
-  [paul a foerster precalculus with trigonometry answers](#)
-  [geometry the triangle midsegment theorem answers](#)
-  [holt geometry practice b answers triangle congruence](#)
-  [algebra trigonometry blitzer custom 4th edition](#)
-  [trigonometry mcq question with answer](#)
-  [trigonometry lial hornsby schneider teacher edition](#)
-  [prentice hall drive right tenth edition answers](#)
-  [wrong but right answers](#)
-  [manipulating special right triangles answers](#)
-  [red triangle golf logo list](#)
-  [greedy triangle](#)
-  [greedy triangle activities first grade](#)
-  [weisbach triangle correlation method](#)
-  [velocity triangle diagram for impulse turbine](#)
-  [the triangle shirtwaist factory](#)
-  [2016 manufacturing industry directory of search firms and recruiters job hunting get your resume in the right hands](#)

DOWNLOAD PDF DOCUMENT